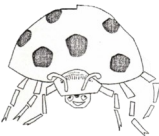





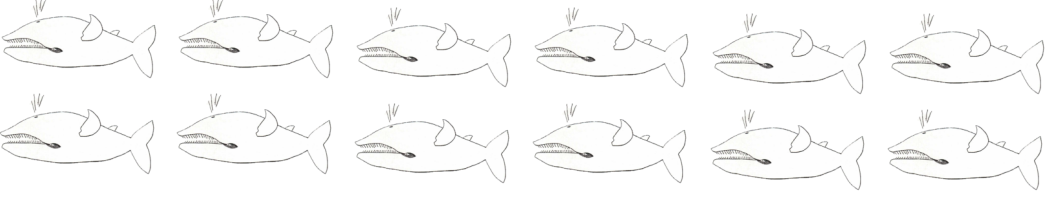
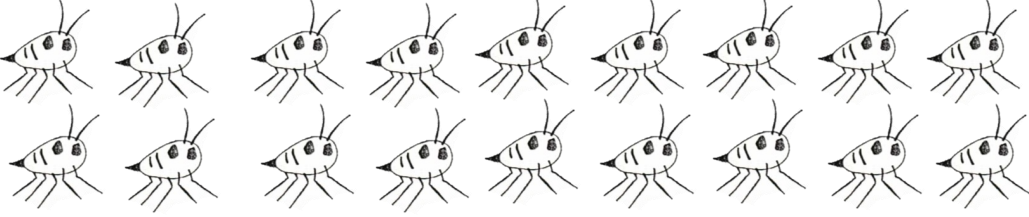
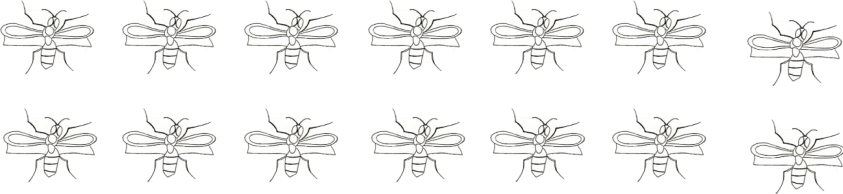
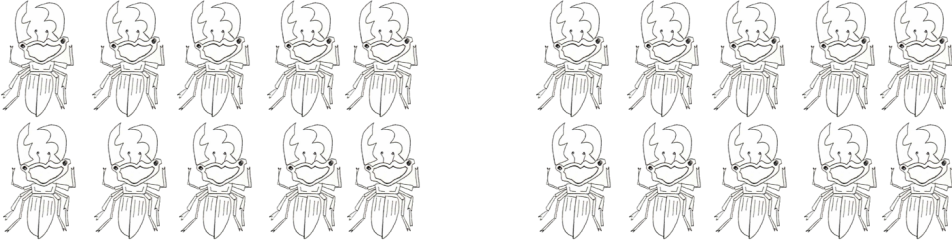





LUNDI		MARDI		MERCREDI		JEUDI		VENDREDI		SAMEDI		DIMANCHE	
1	2	3	4	5	6	7	8	9	10	11	12		
13	14	15	16	17	18	19	20	21	22	23	24		
25	26	27	28	29	30	31							
SEPTEMBRE	OCTOBRE	NOVEMBRE	DECEMBRE	JANVIER	FEVRIER	MARS	AVRIL	MAI	JUIN	JUILLET	AOUT		

Colle le bon nombre d'animaux dans chaque case.

16		
15		
12		
13		
11		
14		

Ecris combien tu vois d'animaux dans chaque case.

 A grid containing 12 simple line drawings of fish, arranged in two rows of six.	
 A grid containing 18 simple line drawings of ants, arranged in two rows of nine.	
 A grid containing 14 simple line drawings of bees, arranged in two rows of seven.	
 A grid containing 20 simple line drawings of beetles, arranged in two rows of ten.	
 A grid containing 15 simple line drawings of crickets, arranged in two rows: the top row has nine and the bottom row has six.	
 A grid containing 10 simple line drawings of cicadas, arranged in two rows: the top row has five and the bottom row has five.	
 A grid containing 15 simple line drawings of birds, arranged in two rows of seven and eight.	