








# Mathématiques

1) Relie le chat à la souris qui a le résultat correct :



2) Colorie le nombre de cases correct puis écris le résultat :


$7 \times 4 = \dots$


$5 \times 4 = \dots$


$9 \times 4 = \dots$


$8 \times 4 = \dots$


$10 \times 4 = \dots$