











# Mathématiques

1) Aide chaque cochon à rejoindre sa maison qui a le résultat correct :



2) Colorie le nombre de cases correct puis écris le résultat :


6 x 5 = ....


9 x 5 = ....


7 x 5 = ....


10 x 5 = ....


8 x 5 = ....