
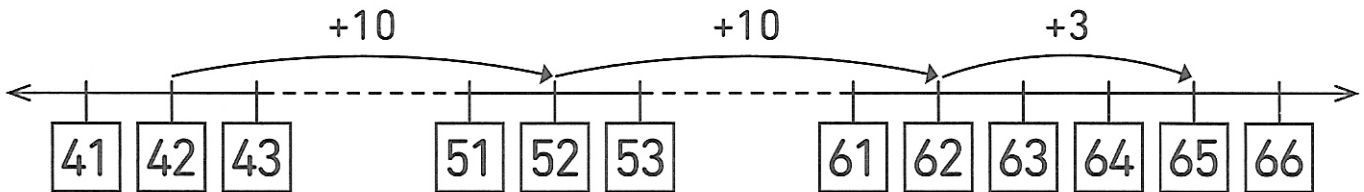


Séance 90 Additionnons des dizaines et des unités

1  Additionne sur la bande numérique.

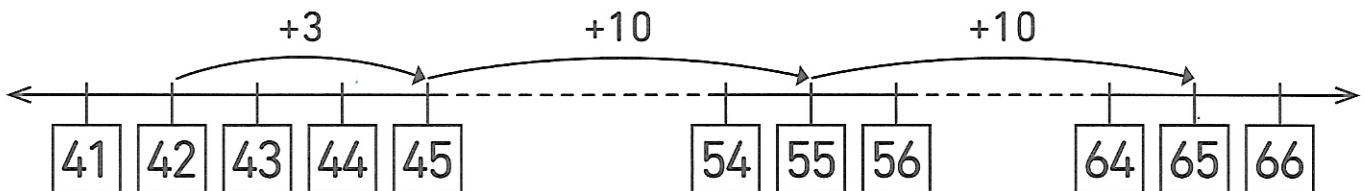
a) $42 + 23 = \square$



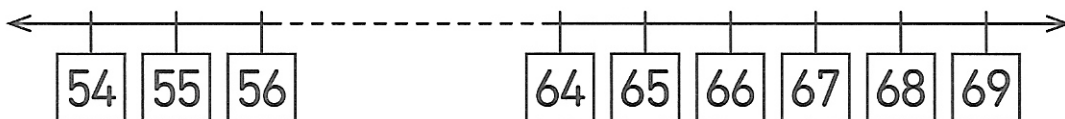
42 + 20 + 3...



... ou 42 + 3 + 20.



b) $55 + 13 = \square$



c) $24 + 31 = \square$

