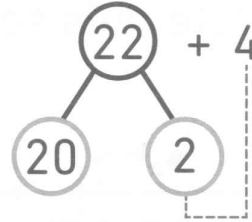
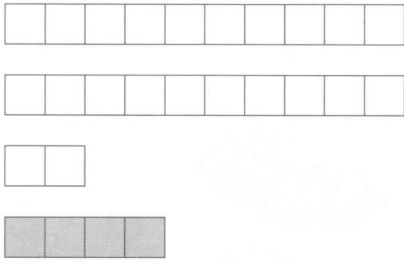
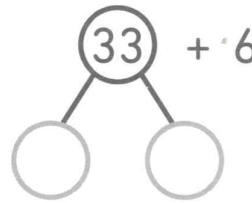
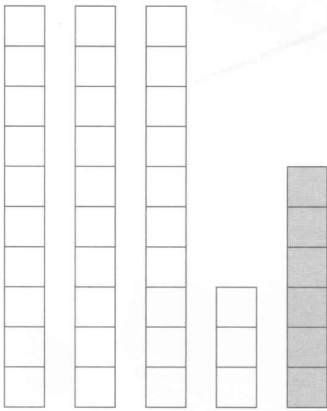


2  Additionne et complète.

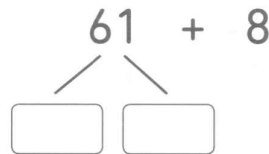
a) $22 + 4 = \square$




b) $33 + 6 = \square$



c) $61 + 8 = \square$



d) $54 + 4 = \square$

3  Soline a un petit train. Elle donne 3 wagons à Alex. Il lui reste 24 wagons. Combien en avait-elle au début ?

Soline avait wagons au début.