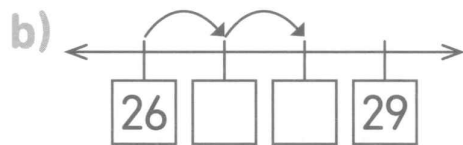
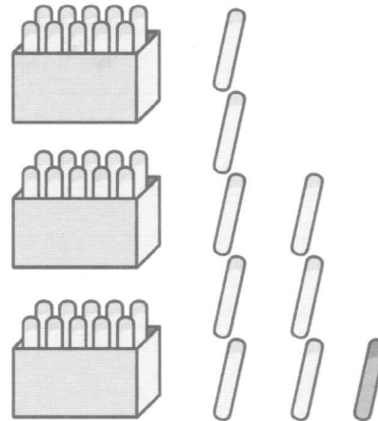


Séance 86 Additionnons des unités

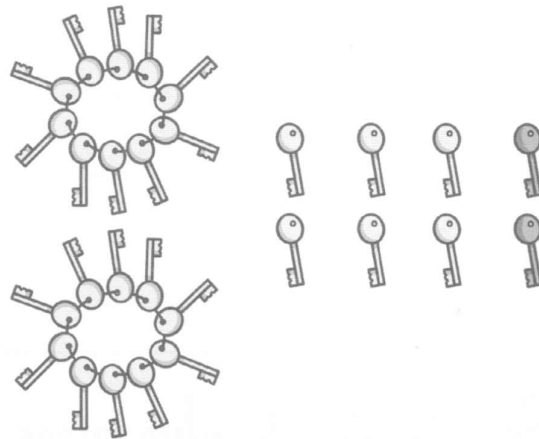
1  Complète puis additionne.



$38 + 1 = \square$



$26 + 2 = \square$



$66 + 3 = \square$

d) $58 + 2 = \square$