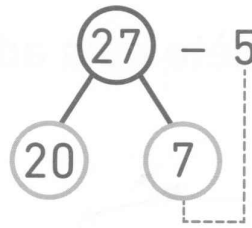
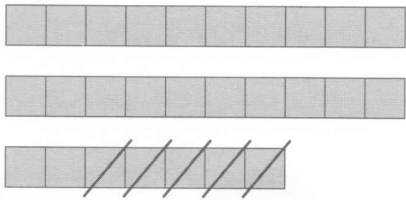
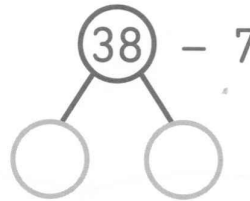
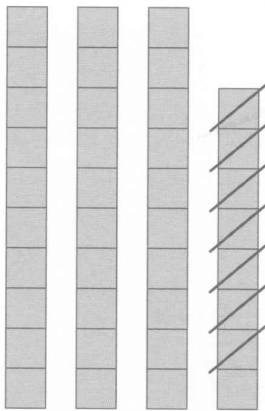


**2**  Soustrais et complète.

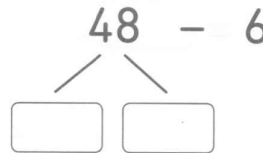
a)  $27 - 5 = \square$




b)  $38 - 7 = \square$



c)  $48 - 6 = \square$



d)  $69 - 9 = \square$

**3**  Hichem a une collection de figurines.  
 Il en reçoit 7 de plus pour son anniversaire.  
 Il en a maintenant 29.  
 Combien en avait-il avant ?

Hichem avait  figurines avant son anniversaire.