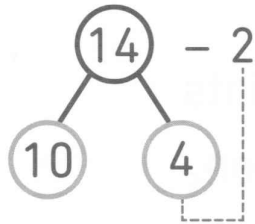


**2**  Observe l'exemple puis complète.

**Exemple**



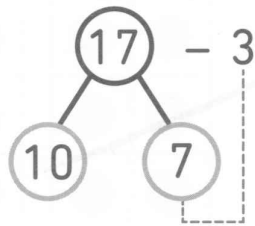
$$4 - 2 = 2$$

Donc :

$$10 + 2 = 12$$

$$14 - 2 = 12$$

a)



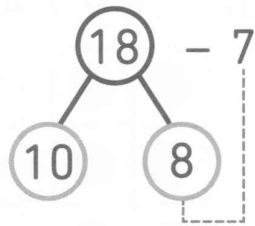
$$7 - 3 = \square$$

Donc :

$$10 + \square = \square$$

$$17 - 3 = \square$$

b)



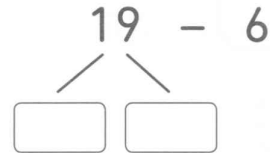
$$8 - 7 = \square$$

Donc :

$$10 + \square = \square$$

$$18 - 7 = \square$$

c)  $19 - 6 = \square$



d)  $18 - 8 = \square$

