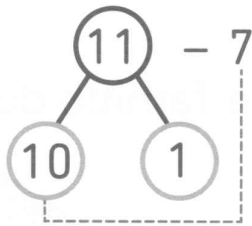


2  Observe l'exemple puis complète.

Exemple



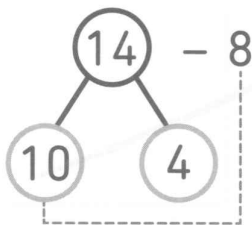
$$10 - 7 = 3$$

Donc :

$$1 + 3 = 4$$

$$11 - 7 = 4$$

a)



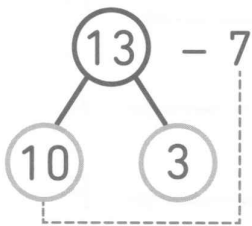
$$10 - 8 = \square$$

Donc :

$$4 + \square = \square$$

$$14 - 8 = \square$$

b)



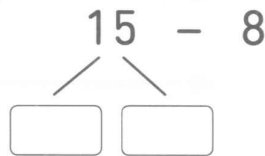
$$10 - 7 = \square$$

Donc :

$$3 + \square = \square$$

$$13 - 7 = \square$$

c) $15 - 8 = \square$



d) $17 - 9 = \square$

