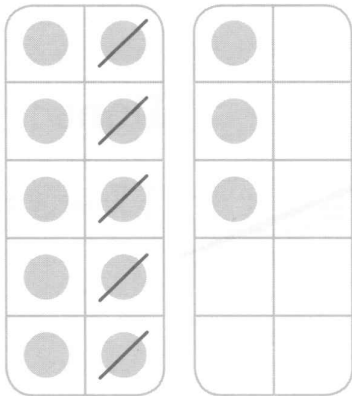



**Séance 60** Soustrayons en décomposant le plus grand nombre (2)

- 1 ✂ Barre le bon nombre de points  
✂ puis complète la soustraction.

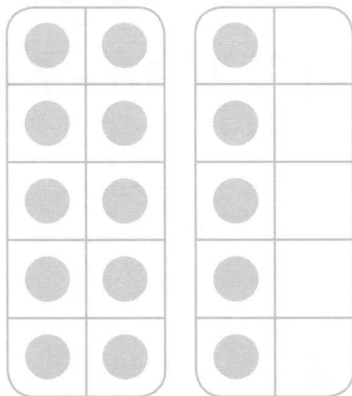
a)  $13 - 5 = \square$




b)  $14 - 7 = \square$




c)  $15 - 6 = \square$



d)  $16 - 7 = \square$



e)  $17 - 8 = \square$



f)  $18 - 9 = \square$

