



Séance 59 Soustrayons en décomposant le plus grand nombre (1)

- 1 ✂ Barre le bon nombre de points
✂ puis complète la soustraction.

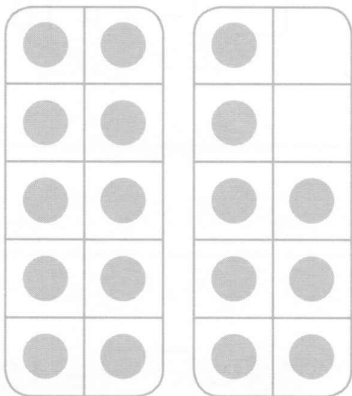
a) $15 - 4 = \square$




b) $16 - 3 = \square$



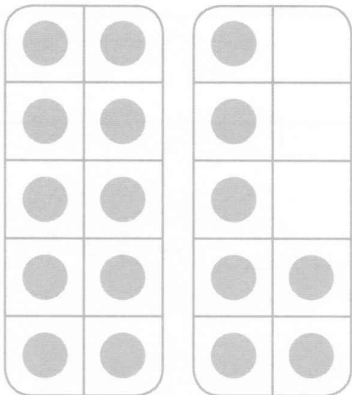
c) $18 - 6 = \square$



d) $19 - 5 = \square$



e) $17 - 4 = \square$



f) $19 - 7 = \square$

