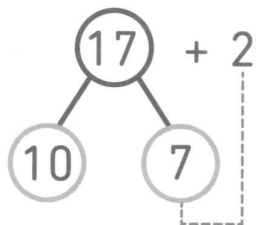


2  Observe l'exemple puis complète.

Exemple



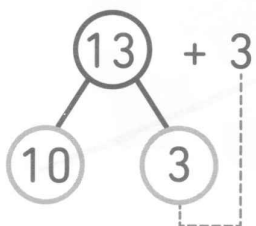
$7 + 2 = 9$

$10 + 9 = 19$

Donc :

$17 + 2 = 19$

a)



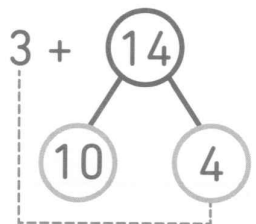
$3 + 3 = \square$

$10 + \square = \square$

Donc :

$13 + 3 = \square$

b)



$3 + 4 = \square$

$10 + \square = \square$

Donc :

$3 + 14 = \square$

c) $6 + 12 = \square$



d) $5 + 14 = \square$

