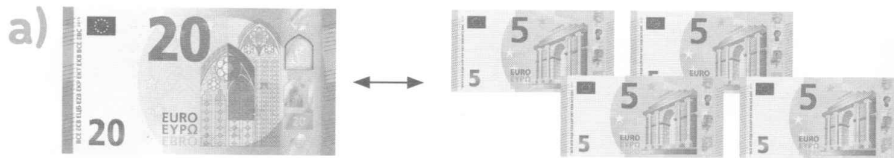
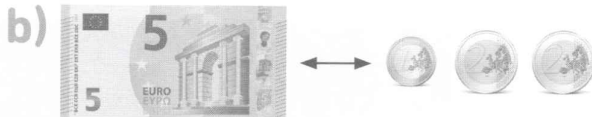


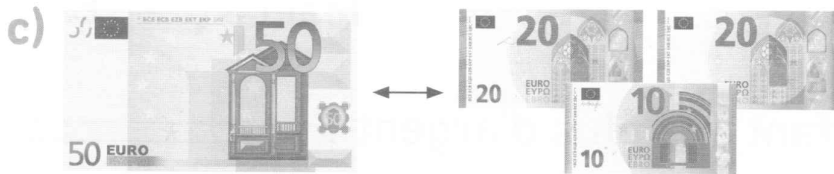
2 ✎ Complète.



1 billet de 20 euros ↔ billets de 5 euros




1 billet de 5 euros ↔ pièces de 2 euros
et pièce de 1 euro



1 billet de 50 euros ↔ billets de 20 euros
et billet de 10 euros

3 ✎ Dessine chaque somme.

80 €



90 €

