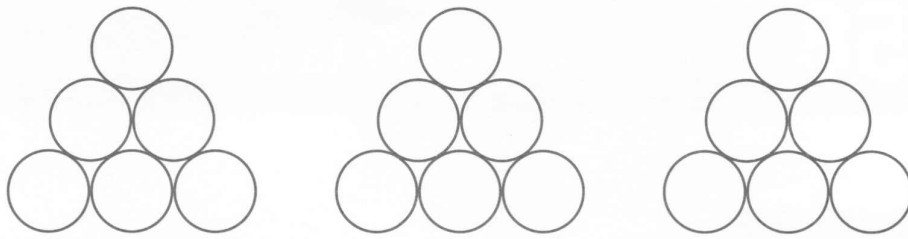
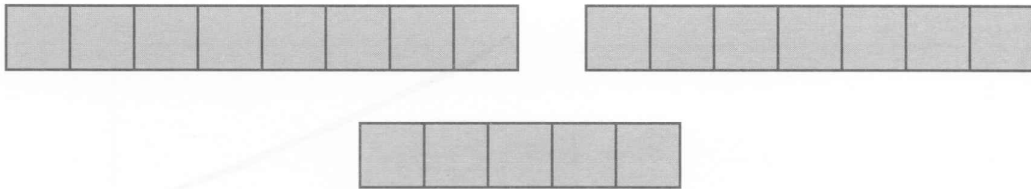


c)



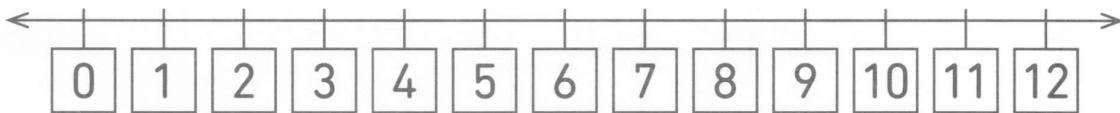
$$6 + 6 + 6 = \square$$

d)



$$8 + 7 + 5 = \square$$

2  Additionne.



a) $4 + 3 + 1 = \square$

b) $4 + 3 + 4 = \square$

c) $6 + 2 + 2 = \square$

d) $6 + 1 + 5 = \square$

3  Additionne.

a) $7 + 3 + 5 = \square$

b) $\square + 1 + 9 = 14$

c) $2 + \square + 8 = 12$

d) $4 + 6 + \square = 18$