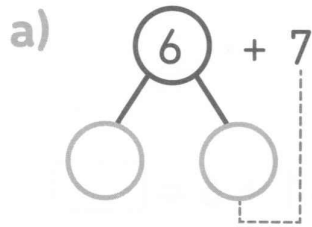
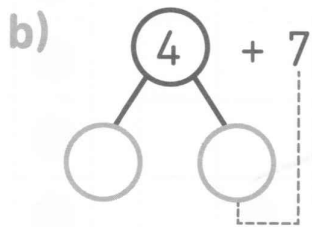
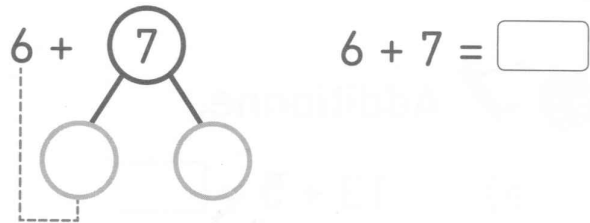


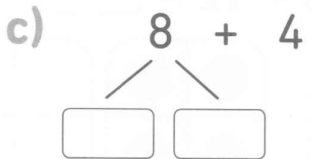
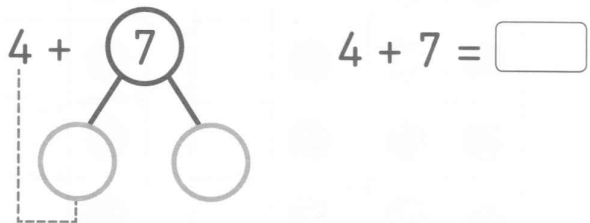
2  Additionne en faisant d'abord un groupe de 10.



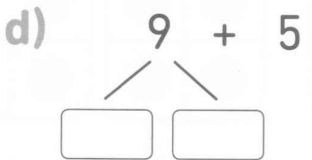
ou



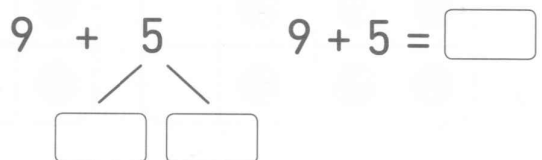
ou



ou



ou



3  Complète les égalités.

a) $7 + 6 = \square$

b) $8 + \square = 17$

c) $\square + 8 = 13$

d) $7 + 7 = \square$