

Mathématiques

Evaluation Mi-G.P.

Nom: _____

Prénom: _____



A Complète la file numérique.

1 2 9 0

1		3	4				8		10
	12			15				19	

B Écris les nombres.

1 2 9 0

--	--	--	--	--

--	--	--	--	--

C Range les nombres du plus petit au plus grand.

1 2 9 0



13	5	16	31	20
----	---	----	----	----

D Ecris le nombre qui est juste avant et celui qui est juste après.

1 2 9 0

	12	
--	----	--

	6	
--	---	--

	1	
--	---	--

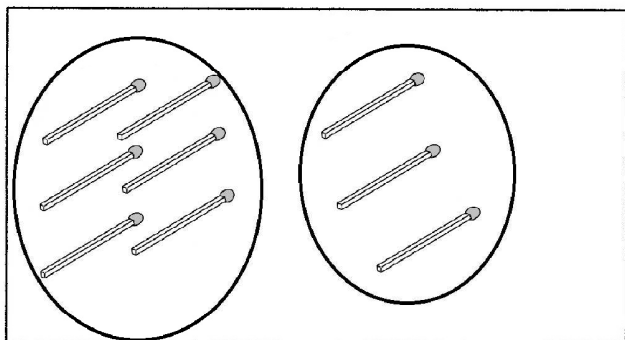
	10	
--	----	--

	37	
--	----	--

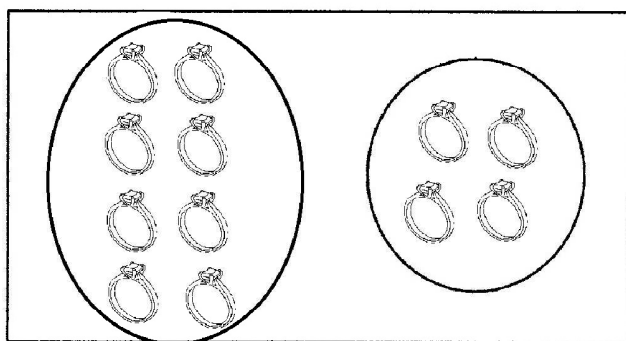
	19	
--	----	--


E Ecris les opérations.

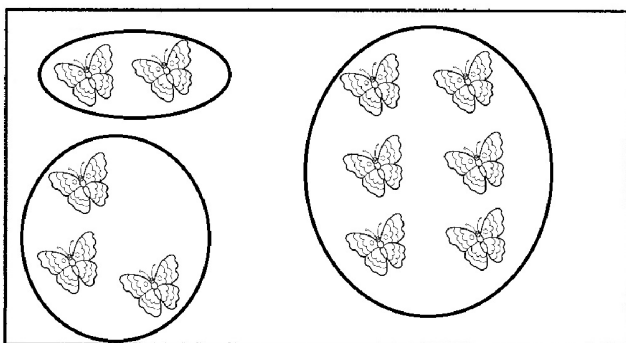
1 2 9 0



_____	+	_____	=	_____
-------	---	-------	---	-------







F Complète les opérations.

1 2 9 0

$6 + 1 = \dots\dots$

$\dots\dots = 3 + 2$

$5 + 3 + \dots\dots = 9$

$3 + 3 = \dots\dots$

$9 = 5 + \dots\dots$

$6 + \dots\dots = 6$

$2 + \dots\dots = 3$

$5 + \dots\dots = 10$

$8 + 0 = \dots\dots$

G Regarde la boîte et écris les opérations.

1 2 9 0


$\dots\dots + \dots\dots = \dots\dots$

H Ecris le résultat.


1 2 9 0

Résous les problèmes.


1 2 9 0



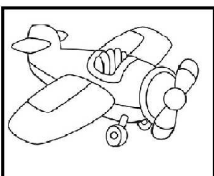
Ma réponse: _____




Ma réponse: _____



Copyright © 2008



4€




3€

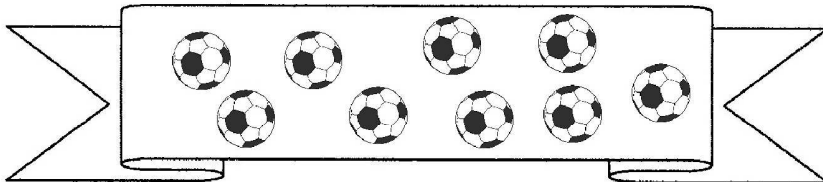


J Compte les objets et complète les phrases.


1	2	9	0
---	---	---	---



Il y a ___ étoiles.



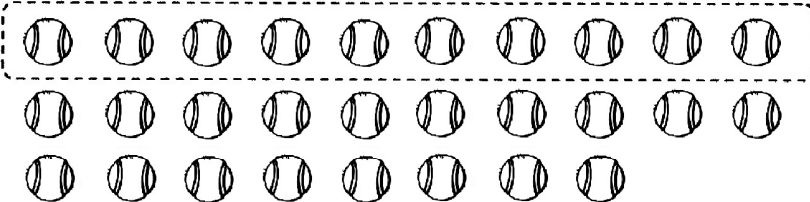
Il y a ___ ballons.



Il y a ___ glaces.

K Cherche le nombre d'objets et complète les phrases.

1	2	9	0
---	---	---	---



Il y a

d	u


 balles.



Il y a

d	u


 bâtons.



Il y a

d	u

 croix.



Il y a

d	u

 tirets.

L

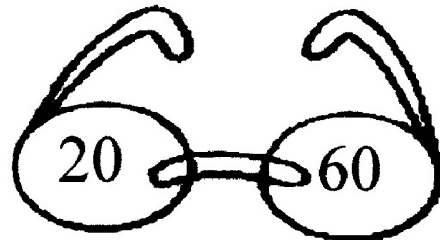
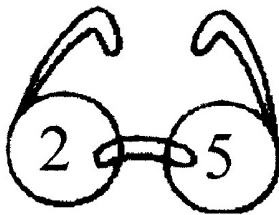
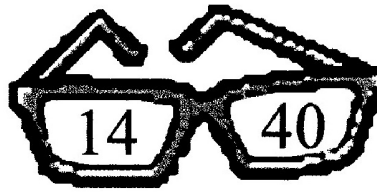
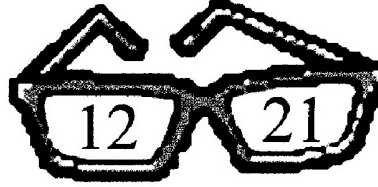
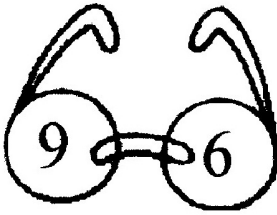
Colorie dans chaque paire de lunettes le nombre le plus grand

1

2

9

0



M

Complète avec le signe $<$, $>$ ou $=$.

1

2

9

0

4 ... 5

19 ... 6

0 ... 1

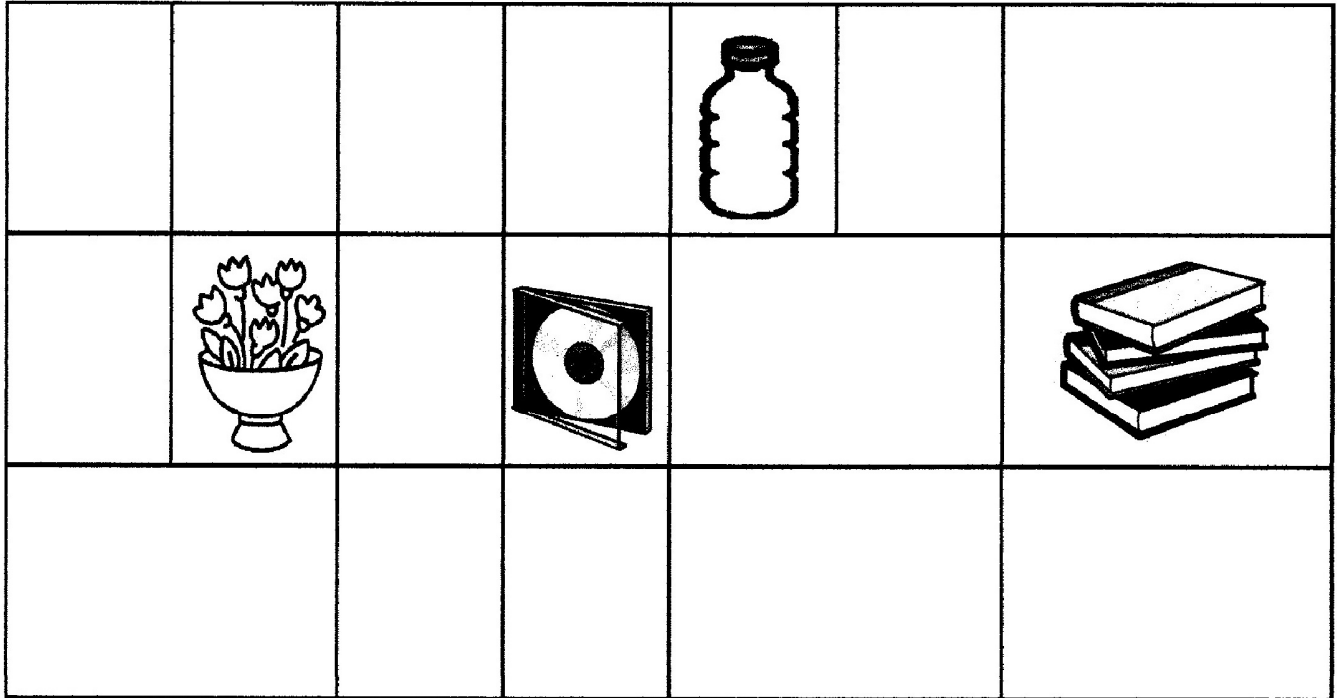
10 + 2 ... 10 + 8

10 + 5 ... 15

N

Dessine à la bonne place

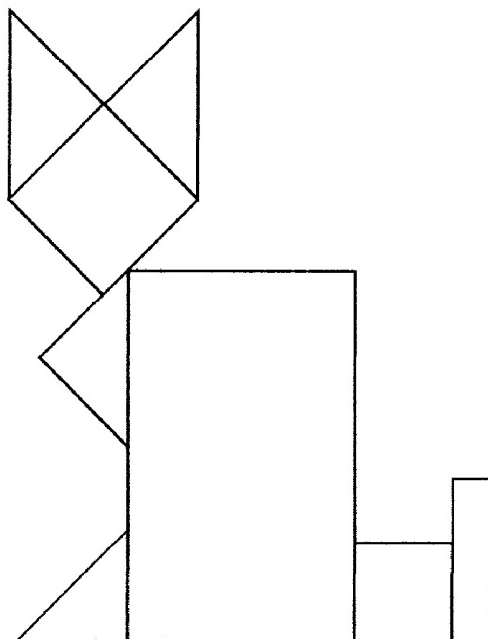
1 5 9 0



O

Colorie les triangles en bleu, les carrés en jaune et les rectangles en rouge.

1 2 9 0



P Reproduis le rectangle et la maison sur les grilles.

1 2 9 0

