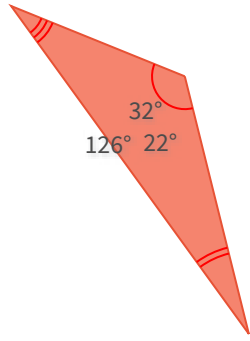


#1

What kind of triangle is this?

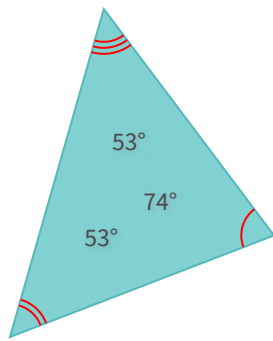


- Acute
 Right
 Obtuse

Show your work

#2

What kind of triangle is this?

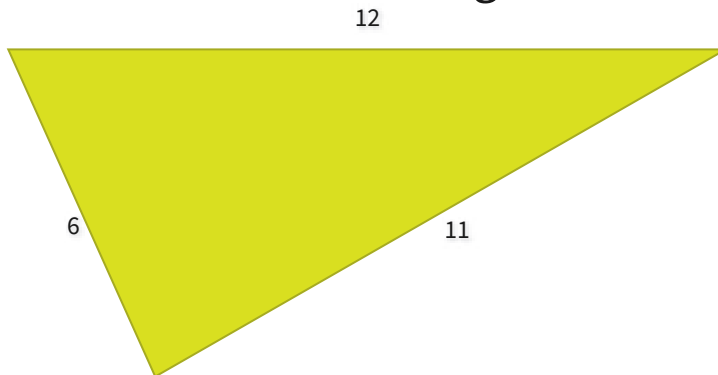


- Acute
 Right
 Obtuse

Show your work

#3

What kind of triangle is this?



- Isosceles but not equilateral
 Equilateral
 Scalene

Show your work

Question	Answer
#1	choice 3
#2	choice 1
#3	choice 3