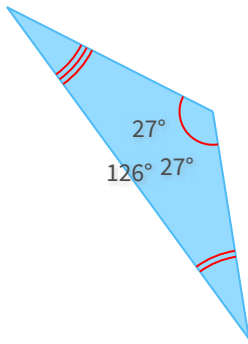


#1

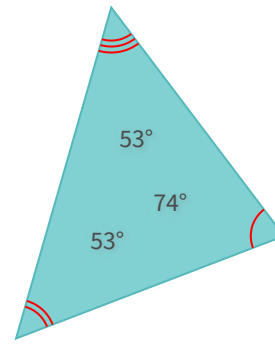
What kind of triangle is this?



- Obtuse
 Right
 Acute

#2

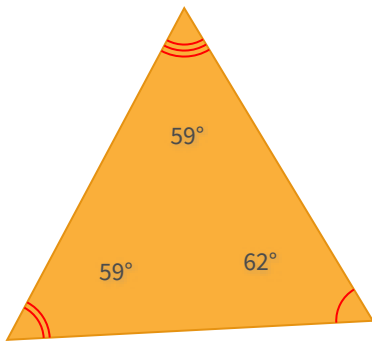
What kind of triangle is this?



- Acute
 Right
 Obtuse

#3

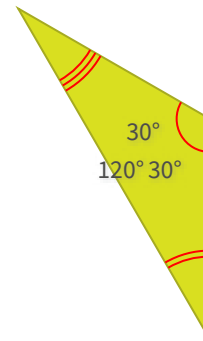
What kind of triangle is this?



- Obtuse
 Right
 Acute

#4

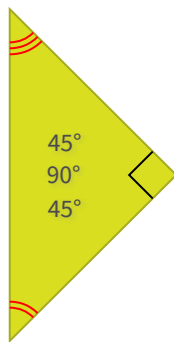
What kind of triangle is this?



- Acute
 Obtuse
 Right

#5

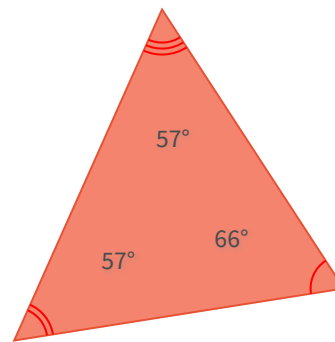
What kind of triangle is this?



- Acute
 Obtuse
 Right

#6

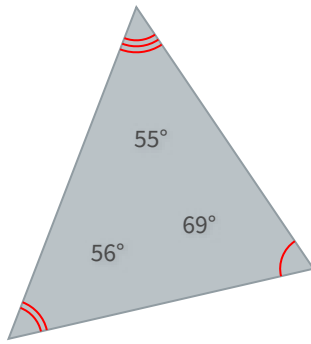
What kind of triangle is this?



- Right
 Obtuse
 Acute

#7

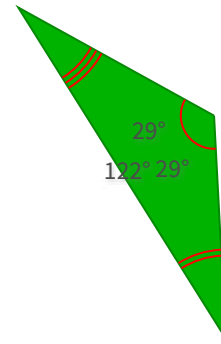
What kind of triangle is this?



- Obtuse
 Right
 Acute

#8

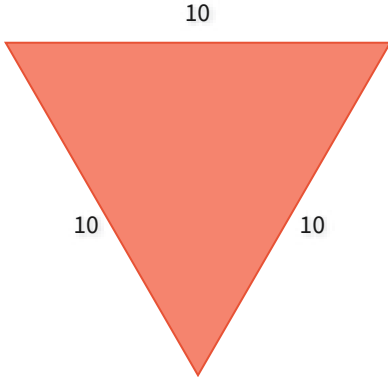
What kind of triangle is this?



- Right
 Acute
 Obtuse

#9

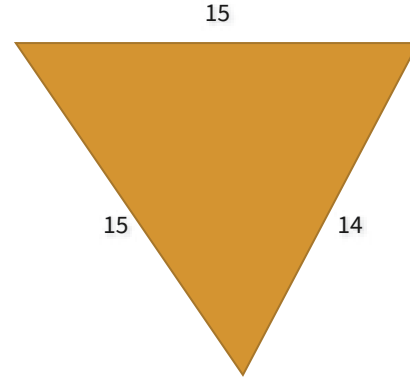
What kind of triangle is this?



- Isosceles but not equilateral
 Scalene
 Equilateral

#10

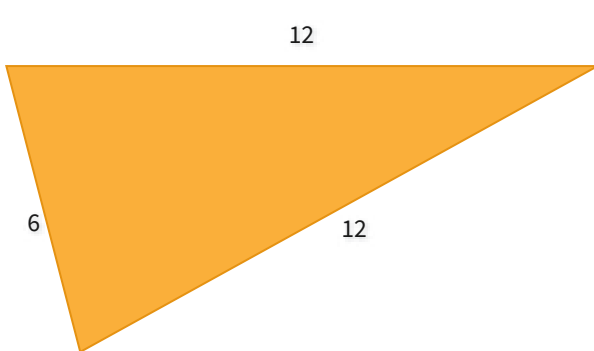
What kind of triangle is this?



- Scalene
 Isosceles but not equilateral
 Equilateral

#11

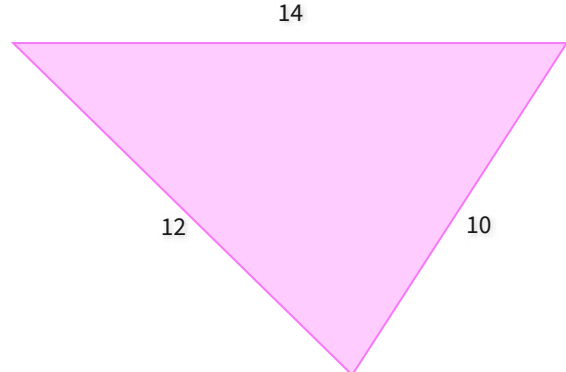
What kind of triangle is this?



- Isosceles but not equilateral
 Equilateral
 Scalene

#12

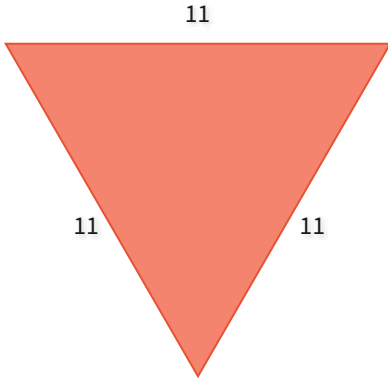
What kind of triangle is this?



- Equilateral
 Isosceles but not equilateral
 Scalene

#13


What kind of triangle is this?



- Scalene
 Equilateral
 Isosceles but not equilateral

#14

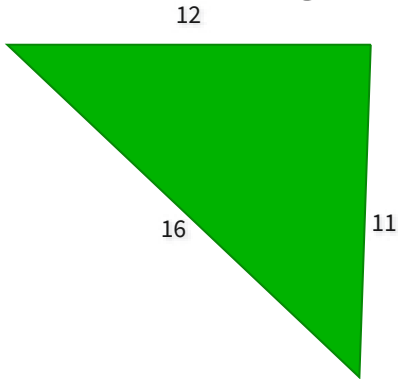
What kind of triangle is this?



- Equilateral
 Isosceles but not equilateral
 Scalene

#15

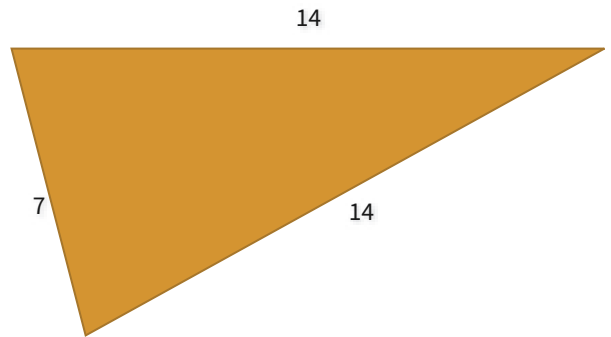
What kind of triangle is this?



- Scalene
 Equilateral
 Isosceles but not equilateral

#16

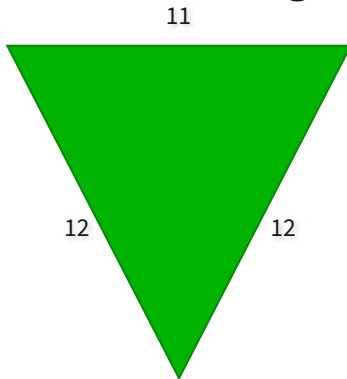
What kind of triangle is this?



- Isosceles but not equilateral
 Scalene
 Equilateral

#17

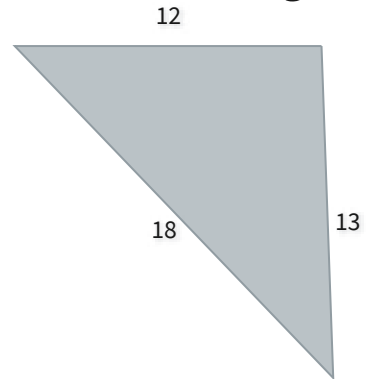
What kind of triangle is this?



- Equilateral
 Scalene
 Isosceles but not equilateral

#18

What kind of triangle is this?



- Isosceles but not equilateral
 Scalene
 Equilateral

Question	Answer
#1	choice 1
#2	choice 1
#3	choice 3
#4	choice 2
#5	choice 3
#6	choice 3
#7	choice 3
#8	choice 3
#9	choice 3
#10	choice 2
#11	choice 1
#12	choice 3
#13	choice 2
#14	choice 3
#15	choice 1
#16	choice 1
#17	choice 3
#18	choice 2