

Autoévaluation : 

 Avec aide  avec outil

Date : / / 20.....
Avis de l'enseignant(e) :

Indique le nombre correspondant

●	●	●		
●	●			

●				
●				

●				
●				

●	●			
●				

●				

●	●			
●				

●	●			
●				

●	●			
●	●			

●				

●				

●	●	●		
●	●			

●	●			
●	●			

●				
●				




●	●			
●				



●	●			
●	●			

●	●	●		
●	●			

●				
●				

●	●			
●	●			

Autoévaluation :   

 Avec aide  avec outil

Date : / / 20.....
Avis de l'enseignant(e) :

Complète les cartes à points

0

4

1

5

2

3

3

1

4

2

5

4

0

3

1

5

2

2

3

1

Autoévaluation : 

 Avec aide  avec outil

Date : / / 20.....
Avis de l'enseignant(e) :

Indique le nombre correspondant

●	●	●	●	●
●	●	●	●	●

●	●	●		
●	●	●		

●	●	●		
●	●	●		

●	●	●		
●	●	●		

●	●	●	●	●
●	●	●	●	●

●	●	●	●	●
●	●	●	●	

●	●	●	●	●
●	●	●	●	

●	●	●		
●	●	●		

●	●	●	●	
●	●	●		

●	●	●	●	
●	●	●		

●	●	●	●	
●	●	●		

●	●	●	●	●
●	●	●	●	●

●	●	●	●	●
●	●	●	●	

●	●	●	●	●
●	●	●	●	

●	●	●	●	
●	●	●	●	

●	●	●	●	●
●	●	●	●	●

●	●	●	●	
●	●	●	●	

●	●	●	●	●
●	●	●	●	

●	●	●	●	●
●	●	●	●	●

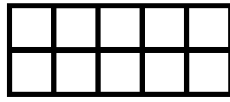
●	●	●	●	
●	●	●	●	

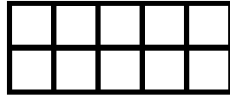
Autoévaluation :   

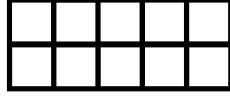
 Avec aide  avec outil

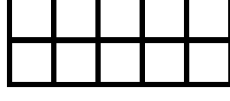
Date : / / 20.....
Avis de l'enseignant(e) :

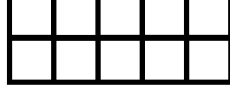
Complète les cartes à points

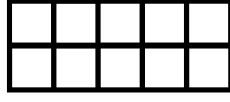
6 

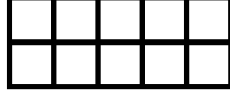
10 

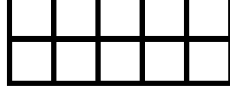
8 

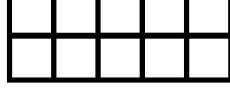
7 

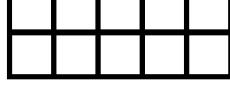
8 

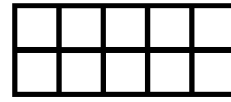
5 

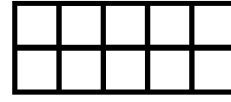
9 


8 

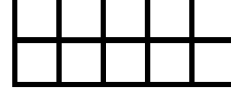
7 

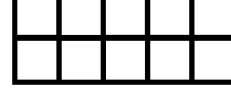
10 

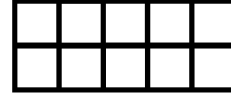
8 


9 

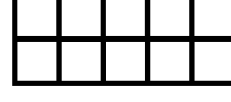
7 

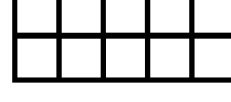
5 

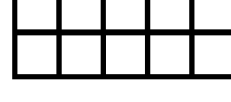
10 

5 

6 

7 

9 

6 

Autoévaluation : 

 Avec aide  avec outil

Date : / / 20.....
Avis de l'enseignant(e) :

Indique le nombre correspondant

●				

●				
●				

●	●			
●				

●	●			
●	●			

●	●	●		
●	●			

●	●	●		
●	●	●		

●	●	●	●	
●	●	●		

●	●	●	●	
●	●	●	●	

●	●	●	●	●
●	●	●	●	

●	●	●	●	●
●	●	●	●	●

Observe les 2 colonnes. Que remarques-tu ?

Écris maintenant la liste des nombres ...

impairs _____

pairs _____

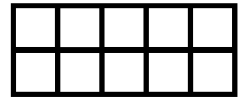
Autoévaluation :   

 Avec aide  avec outil

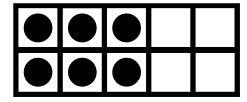
Date : / / 20.....
Avis de l'enseignant(e) :

Complète la carte à points puis l'addition pour savoir combien il manque pour arriver à 10.

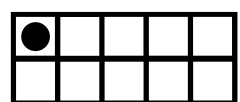
$0 + \dots = 10$



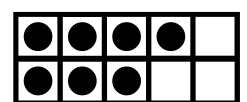
$6 + \dots = 10$



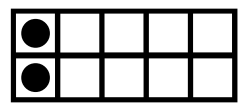
$1 + \dots = 10$



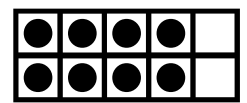
$7 + \dots = 10$



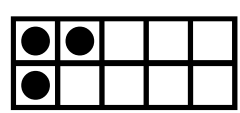
$2 + \dots = 10$



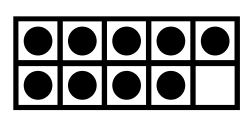
$8 + \dots = 10$



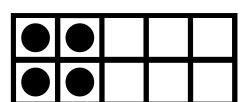
$3 + \dots = 10$



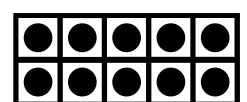
$9 + \dots = 10$



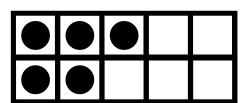
$4 + \dots = 10$








$10 + \dots = 10$



$5 + \dots = 10$








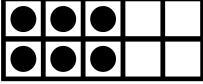





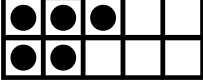

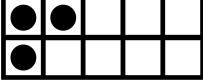



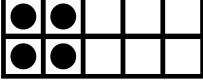




Autoévaluation :   

 Avec aide  avec outil

Date : / / 20.....
Avis de l'enseignant(e) :

Indique le nombre correspondant

		*	* 10 + 4 *	* 10
		*	* 10 + 8 *	* 13
		*	* 10 + 5 *	* 12
		*	* 10 + 9 *	* 17
		*	* 10 + 1 *	* 18
		*	* 10 + 6 *	* 16
		*	* 10 + 2 *	* 11
		*	* 10 + 7 *	* 14
		*	* 10 + 0 *	* 19
		*	* 10 + 10 *	* 20
		*	* 10 + 3 *	* 15

Autoévaluation : 

 Avec aide  avec outil

Date : / / 20.....
Avis de l'enseignant(e) :

Indique le nombre correspondant

●	●	●	●	●	●	●			
●	●	●	●	●	●	●			

●	●	●	●	●	●	●	●		
●	●	●	●	●	●	●			

●	●	●	●	●	●	●	●	●	●
●	●	●	●	●	●	●	●		

●	●	●	●	●	●	●	●	●	
●	●	●	●	●	●	●	●		

●	●	●	●	●	●	●	●		
●	●	●	●	●	●	●			

●	●	●	●	●	●	●	●	●	●
●	●	●	●	●	●	●	●		

●	●	●	●	●	●	●	●		
●	●	●	●	●	●	●			

●	●	●	●	●	●	●	●	●	
●	●	●	●	●	●	●			

●	●	●	●	●	●	●	●	●	●
●	●	●	●	●	●	●	●	●	●

●	●	●	●	●	●	●	●	●	●
●	●	●	●	●	●	●	●	●	●

●	●	●	●	●	●	●	●		
●	●	●	●	●	●	●			

●	●	●	●	●	●	●	●	●	●
●	●	●	●	●	●	●	●		

●	●	●	●	●	●	●	●	●	●
●	●	●	●	●	●	●	●	●	●




●	●	●	●	●	●	●	●	●	●
●	●	●	●	●	●	●	●		



●	●	●	●	●	●	●	●		
●	●	●	●	●	●	●			

●	●	●	●	●	●	●	●	●	●
●	●	●	●	●	●	●	●	●	●

●	●	●	●	●	●	●	●	●	●
●	●	●	●	●	●	●			

●	●	●	●	●	●	●	●	●	●
●	●	●	●	●	●	●			

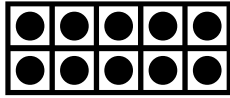
Autoévaluation :   

 Avec aide  avec outil

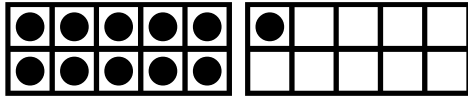
Date : / / 20.....
Avis de l'enseignant(e) :

Complète la carte à points puis l'addition pour faire 20.


10 + = 20




11 + = 20




12 + = 20




13 + = 20



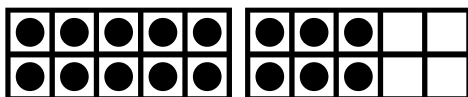
14 + = 20



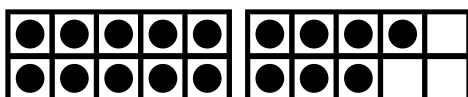
15 + = 20




16 + = 20




17 + = 20



18 + = 20




19 + = 20



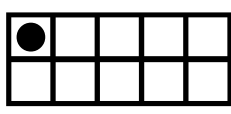
Autoévaluation :   

 Avec aide

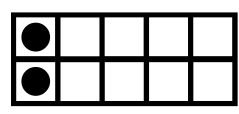
 avec outil

Date : / / 20.....
Avis de l'enseignant(e) :

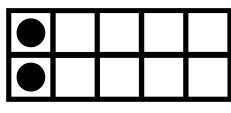
Calcule



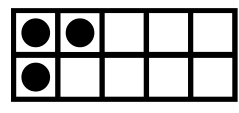
+



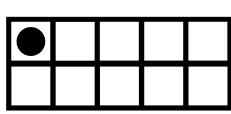
1 + 2 =



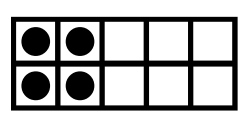
+



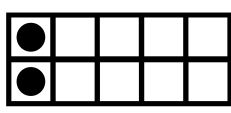
2 + 3 =



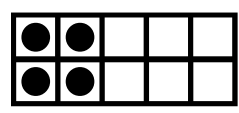
+



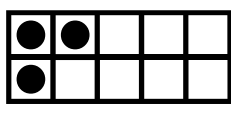
1 + 4 =



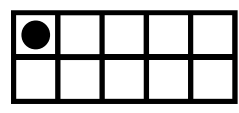
+



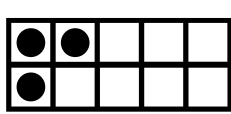
2 + 4 =



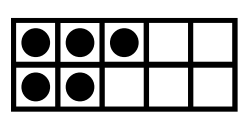
+



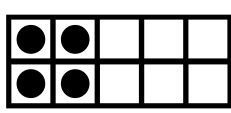
3 + 1 =



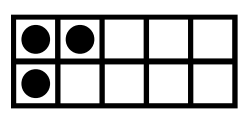
+



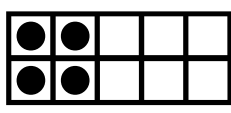
3 + 5 =



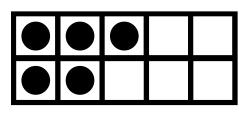
+



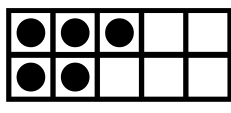
4 + 3 =



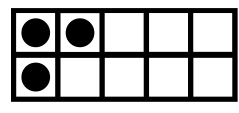
+



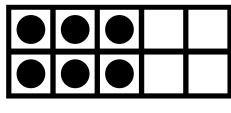
4 + 5 =



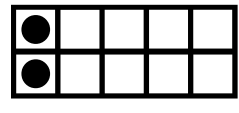
+



5 + 3 =



+



6 + 2 =

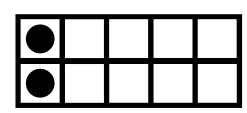
Autoévaluation :   

 Avec aide  avec outil

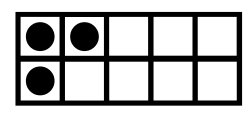
Date : / / 20.....
Avis de l'enseignant(e) :

Complète les cartes à points pour trouver le résultat

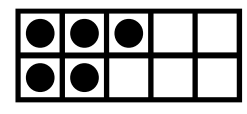
2 + 5 =



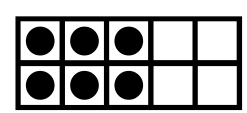
3 + 4 =



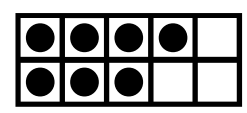
5 + 2 =



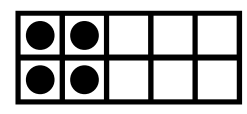
6 + 4 =



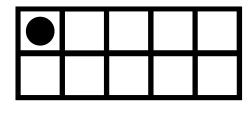
7 + 2 =



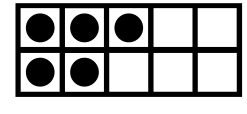
4 + 5 =



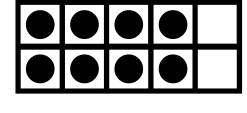
1 + 8 =



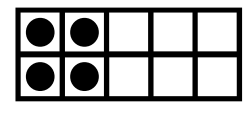
5 + 3 =



8 + 2 =



4 + 4 =



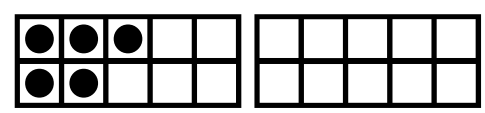
Autoévaluation :   

 Avec aide  avec outil

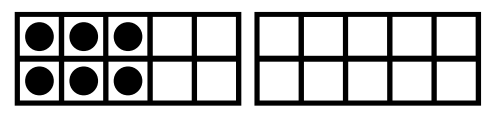
Date : / / 20.....
Avis de l'enseignant(e) :

Complète les cartes à points pour trouver le résultat

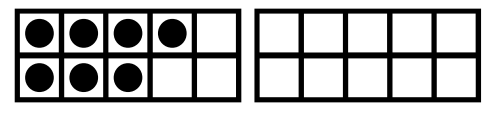
5 + 4 =



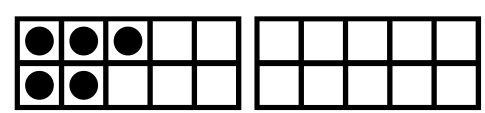
6 + 5 =



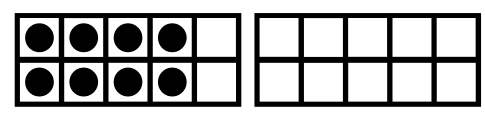
7 + 6 =



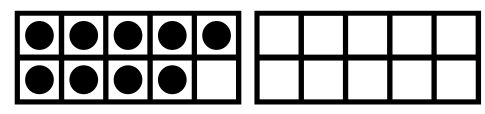
5 + 8 =



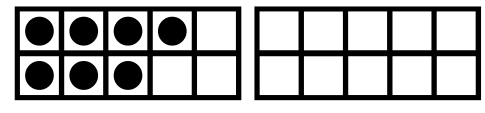
8 + 5 =



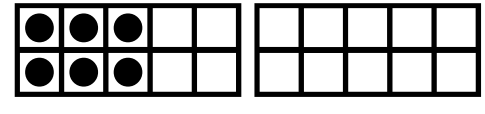
9 + 3 =



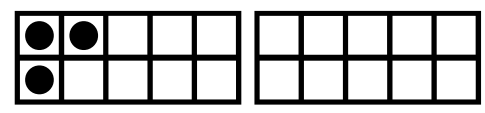
7 + 7 =



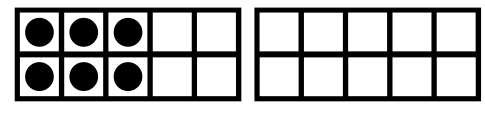
6 + 6 =



3 + 9 =



6 + 8 =



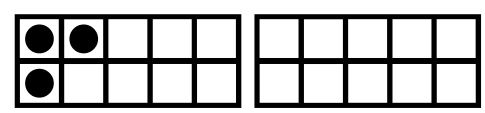
Autoévaluation :   

 Avec aide  avec outil

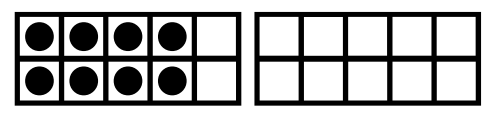
Date : / / 20.....
Avis de l'enseignant(e) :

Complète les cartes à points pour trouver le résultat

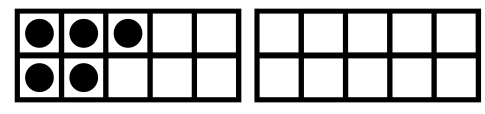
3 + 8 =



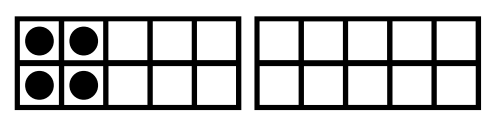
8 + 5 =



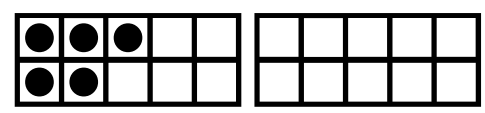
5 + 6 =



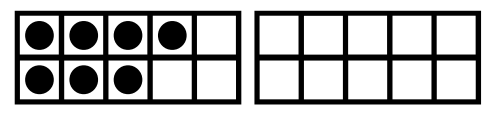
4 + 9 =



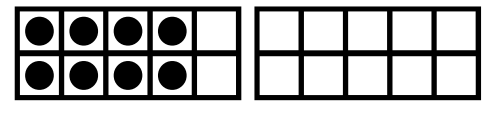
5 + 10 =



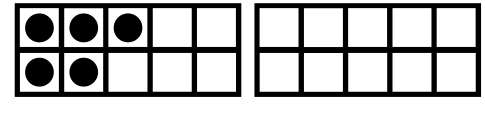
7 + 6 =



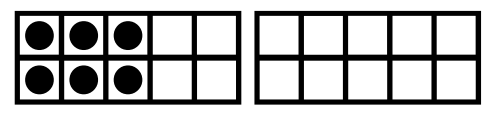
8 + 12 =



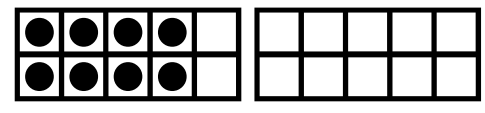
5 + 14 =






6 + 8 =



8 + 8 =

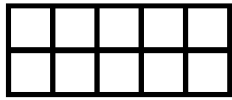


Autoévaluation : 

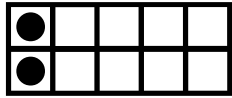
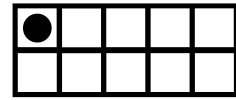
 Avec aide  avec outil

Date : / / 20.....
Avis de l'enseignant(e) :

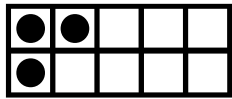
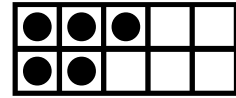
Écris le nombre représenté par la carte à points puis place le signe < > = comme dans l'exemple .




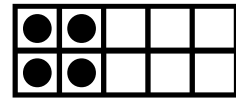
0 < 1



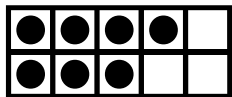
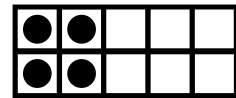
_____ . _____



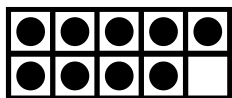
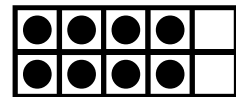
_____ . _____



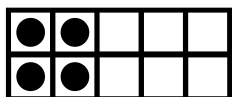
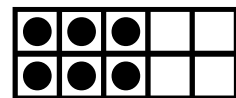
_____ . _____



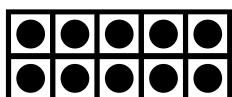
_____ . _____



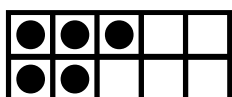
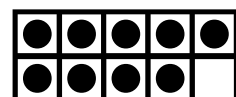
_____ . _____



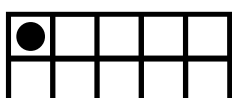
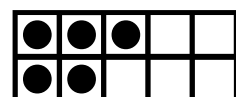
_____ . _____



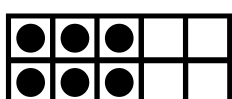
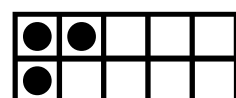
_____ . _____



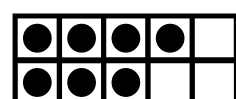
_____ . _____



_____ . _____



_____ . _____


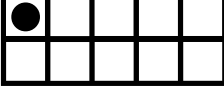

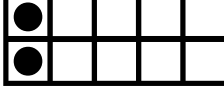

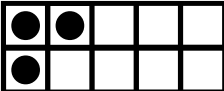

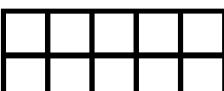



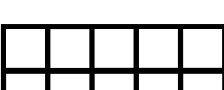



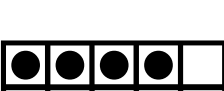










Autoévaluation : 

 Avec aide  avec outil

Date : / / 20.....
Avis de l'enseignant(e) :

Écris le nombre représenté par la carte à points puis place le signe < > = comme dans l'exemple .

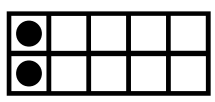


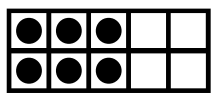



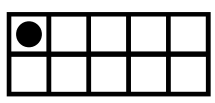


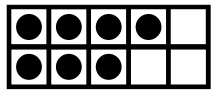



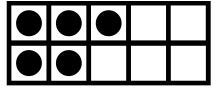


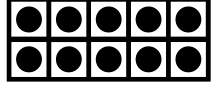



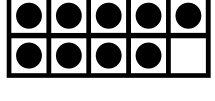


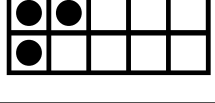






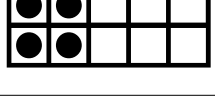


		$11 < 12$														
		<table border="0" style="width: 100%;"> <tr><td style="border-top: 1px solid black; border-bottom: 1px solid black; height: 10px;"> </td><td style="border-top: 1px solid black; border-bottom: 1px solid black; height: 10px;"> </td></tr> <tr><td style="border-top: 1px dashed black; border-bottom: 1px dashed black; height: 10px;"> </td><td style="border-top: 1px dashed black; border-bottom: 1px dashed black; height: 10px;"> </td></tr> <tr><td style="border-top: 1px solid black; border-bottom: 1px solid black; height: 10px;"> </td><td style="border-top: 1px solid black; border-bottom: 1px solid black; height: 10px;"> </td></tr> </table>							.	<table border="0" style="width: 100%;"> <tr><td style="border-top: 1px solid black; border-bottom: 1px solid black; height: 10px;"> </td><td style="border-top: 1px solid black; border-bottom: 1px solid black; height: 10px;"> </td></tr> <tr><td style="border-top: 1px dashed black; border-bottom: 1px dashed black; height: 10px;"> </td><td style="border-top: 1px dashed black; border-bottom: 1px dashed black; height: 10px;"> </td></tr> <tr><td style="border-top: 1px solid black; border-bottom: 1px solid black; height: 10px;"> </td><td style="border-top: 1px solid black; border-bottom: 1px solid black; height: 10px;"> </td></tr> </table>						
		<table border="0" style="width: 100%;"> <tr><td style="border-top: 1px solid black; border-bottom: 1px solid black; height: 10px;"> </td><td style="border-top: 1px solid black; border-bottom: 1px solid black; height: 10px;"> </td></tr> <tr><td style="border-top: 1px dashed black; border-bottom: 1px dashed black; height: 10px;"> </td><td style="border-top: 1px dashed black; border-bottom: 1px dashed black; height: 10px;"> </td></tr> <tr><td style="border-top: 1px solid black; border-bottom: 1px solid black; height: 10px;"> </td><td style="border-top: 1px solid black; border-bottom: 1px solid black; height: 10px;"> </td></tr> </table>							.	<table border="0" style="width: 100%;"> <tr><td style="border-top: 1px solid black; border-bottom: 1px solid black; height: 10px;"> </td><td style="border-top: 1px solid black; border-bottom: 1px solid black; height: 10px;"> </td></tr> <tr><td style="border-top: 1px dashed black; border-bottom: 1px dashed black; height: 10px;"> </td><td style="border-top: 1px dashed black; border-bottom: 1px dashed black; height: 10px;"> </td></tr> <tr><td style="border-top: 1px solid black; border-bottom: 1px solid black; height: 10px;"> </td><td style="border-top: 1px solid black; border-bottom: 1px solid black; height: 10px;"> </td></tr> </table>						
		<table border="0" style="width: 100%;"> <tr><td style="border-top: 1px solid black; border-bottom: 1px solid black; height: 10px;"> </td><td style="border-top: 1px solid black; border-bottom: 1px solid black; height: 10px;"> </td></tr> <tr><td style="border-top: 1px dashed black; border-bottom: 1px dashed black; height: 10px;"> </td><td style="border-top: 1px dashed black; border-bottom: 1px dashed black; height: 10px;"> </td></tr> <tr><td style="border-top: 1px solid black; border-bottom: 1px solid black; height: 10px;"> </td><td style="border-top: 1px solid black; border-bottom: 1px solid black; height: 10px;"> </td></tr> </table>							.	<table border="0" style="width: 100%;"> <tr><td style="border-top: 1px solid black; border-bottom: 1px solid black; height: 10px;"> </td><td style="border-top: 1px solid black; border-bottom: 1px solid black; height: 10px;"> </td></tr> <tr><td style="border-top: 1px dashed black; border-bottom: 1px dashed black; height: 10px;"> </td><td style="border-top: 1px dashed black; border-bottom: 1px dashed black; height: 10px;"> </td></tr> <tr><td style="border-top: 1px solid black; border-bottom: 1px solid black; height: 10px;"> </td><td style="border-top: 1px solid black; border-bottom: 1px solid black; height: 10px;"> </td></tr> </table>						
		<table border="0" style="width: 100%;"> <tr><td style="border-top: 1px solid black; border-bottom: 1px solid black; height: 10px;"> </td><td style="border-top: 1px solid black; border-bottom: 1px solid black; height: 10px;"> </td></tr> <tr><td style="border-top: 1px dashed black; border-bottom: 1px dashed black; height: 10px;"> </td><td style="border-top: 1px dashed black; border-bottom: 1px dashed black; height: 10px;"> </td></tr> <tr><td style="border-top: 1px solid black; border-bottom: 1px solid black; height: 10px;"> </td><td style="border-top: 1px solid black; border-bottom: 1px solid black; height: 10px;"> </td></tr> </table>							.	<table border="0" style="width: 100%;"> <tr><td style="border-top: 1px solid black; border-bottom: 1px solid black; height: 10px;"> </td><td style="border-top: 1px solid black; border-bottom: 1px solid black; height: 10px;"> </td></tr> <tr><td style="border-top: 1px dashed black; border-bottom: 1px dashed black; height: 10px;"> </td><td style="border-top: 1px dashed black; border-bottom: 1px dashed black; height: 10px;"> </td></tr> <tr><td style="border-top: 1px solid black; border-bottom: 1px solid black; height: 10px;"> </td><td style="border-top: 1px solid black; border-bottom: 1px solid black; height: 10px;"> </td></tr> </table>						
		<table border="0" style="width: 100%;"> <tr><td style="border-top: 1px solid black; border-bottom: 1px solid black; height: 10px;"> </td><td style="border-top: 1px solid black; border-bottom: 1px solid black; height: 10px;"> </td></tr> <tr><td style="border-top: 1px dashed black; border-bottom: 1px dashed black; height: 10px;"> </td><td style="border-top: 1px dashed black; border-bottom: 1px dashed black; height: 10px;"> </td></tr> <tr><td style="border-top: 1px solid black; border-bottom: 1px solid black; height: 10px;"> </td><td style="border-top: 1px solid black; border-bottom: 1px solid black; height: 10px;"> </td></tr> </table>							.	<table border="0" style="width: 100%;"> <tr><td style="border-top: 1px solid black; border-bottom: 1px solid black; height: 10px;"> </td><td style="border-top: 1px solid black; border-bottom: 1px solid black; height: 10px;"> </td></tr> <tr><td style="border-top: 1px dashed black; border-bottom: 1px dashed black; height: 10px;"> </td><td style="border-top: 1px dashed black; border-bottom: 1px dashed black; height: 10px;"> </td></tr> <tr><td style="border-top: 1px solid black; border-bottom: 1px solid black; height: 10px;"> </td><td style="border-top: 1px solid black; border-bottom: 1px solid black; height: 10px;"> </td></tr> </table>						
		<table border="0" style="width: 100%;"> <tr><td style="border-top: 1px solid black; border-bottom: 1px solid black; height: 10px;"> </td><td style="border-top: 1px solid black; border-bottom: 1px solid black; height: 10px;"> </td></tr> <tr><td style="border-top: 1px dashed black; border-bottom: 1px dashed black; height: 10px;"> </td><td style="border-top: 1px dashed black; border-bottom: 1px dashed black; height: 10px;"> </td></tr> <tr><td style="border-top: 1px solid black; border-bottom: 1px solid black; height: 10px;"> </td><td style="border-top: 1px solid black; border-bottom: 1px solid black; height: 10px;"> </td></tr> </table>							.	<table border="0" style="width: 100%;"> <tr><td style="border-top: 1px solid black; border-bottom: 1px solid black; height: 10px;"> </td><td style="border-top: 1px solid black; border-bottom: 1px solid black; height: 10px;"> </td></tr> <tr><td style="border-top: 1px dashed black; border-bottom: 1px dashed black; height: 10px;"> </td><td style="border-top: 1px dashed black; border-bottom: 1px dashed black; height: 10px;"> </td></tr> <tr><td style="border-top: 1px solid black; border-bottom: 1px solid black; height: 10px;"> </td><td style="border-top: 1px solid black; border-bottom: 1px solid black; height: 10px;"> </td></tr> </table>						
		<table border="0" style="width: 100%;"> <tr><td style="border-top: 1px solid black; border-bottom: 1px solid black; height: 10px;"> </td><td style="border-top: 1px solid black; border-bottom: 1px solid black; height: 10px;"> </td></tr> <tr><td style="border-top: 1px dashed black; border-bottom: 1px dashed black; height: 10px;"> </td><td style="border-top: 1px dashed black; border-bottom: 1px dashed black; height: 10px;"> </td></tr> <tr><td style="border-top: 1px solid black; border-bottom: 1px solid black; height: 10px;"> </td><td style="border-top: 1px solid black; border-bottom: 1px solid black; height: 10px;"> </td></tr> </table>							.	<table border="0" style="width: 100%;"> <tr><td style="border-top: 1px solid black; border-bottom: 1px solid black; height: 10px;"> </td><td style="border-top: 1px solid black; border-bottom: 1px solid black; height: 10px;"> </td></tr> <tr><td style="border-top: 1px dashed black; border-bottom: 1px dashed black; height: 10px;"> </td><td style="border-top: 1px dashed black; border-bottom: 1px dashed black; height: 10px;"> </td></tr> <tr><td style="border-top: 1px solid black; border-bottom: 1px solid black; height: 10px;"> </td><td style="border-top: 1px solid black; border-bottom: 1px solid black; height: 10px;"> </td></tr> </table>						
		<table border="0" style="width: 100%;"> <tr><td style="border-top: 1px solid black; border-bottom: 1px solid black; height: 10px;"> </td><td style="border-top: 1px solid black; border-bottom: 1px solid black; height: 10px;"> </td></tr> <tr><td style="border-top: 1px dashed black; border-bottom: 1px dashed black; height: 10px;"> </td><td style="border-top: 1px dashed black; border-bottom: 1px dashed black; height: 10px;"> </td></tr> <tr><td style="border-top: 1px solid black; border-bottom: 1px solid black; height: 10px;"> </td><td style="border-top: 1px solid black; border-bottom: 1px solid black; height: 10px;"> </td></tr> </table>							.	<table border="0" style="width: 100%;"> <tr><td style="border-top: 1px solid black; border-bottom: 1px solid black; height: 10px;"> </td><td style="border-top: 1px solid black; border-bottom: 1px solid black; height: 10px;"> </td></tr> <tr><td style="border-top: 1px dashed black; border-bottom: 1px dashed black; height: 10px;"> </td><td style="border-top: 1px dashed black; border-bottom: 1px dashed black; height: 10px;"> </td></tr> <tr><td style="border-top: 1px solid black; border-bottom: 1px solid black; height: 10px;"> </td><td style="border-top: 1px solid black; border-bottom: 1px solid black; height: 10px;"> </td></tr> </table>						
		<table border="0" style="width: 100%;"> <tr><td style="border-top: 1px solid black; border-bottom: 1px solid black; height: 10px;"> </td><td style="border-top: 1px solid black; border-bottom: 1px solid black; height: 10px;"> </td></tr> <tr><td style="border-top: 1px dashed black; border-bottom: 1px dashed black; height: 10px;"> </td><td style="border-top: 1px dashed black; border-bottom: 1px dashed black; height: 10px;"> </td></tr> <tr><td style="border-top: 1px solid black; border-bottom: 1px solid black; height: 10px;"> </td><td style="border-top: 1px solid black; border-bottom: 1px solid black; height: 10px;"> </td></tr> </table>							.	<table border="0" style="width: 100%;"> <tr><td style="border-top: 1px solid black; border-bottom: 1px solid black; height: 10px;"> </td><td style="border-top: 1px solid black; border-bottom: 1px solid black; height: 10px;"> </td></tr> <tr><td style="border-top: 1px dashed black; border-bottom: 1px dashed black; height: 10px;"> </td><td style="border-top: 1px dashed black; border-bottom: 1px dashed black; height: 10px;"> </td></tr> <tr><td style="border-top: 1px solid black; border-bottom: 1px solid black; height: 10px;"> </td><td style="border-top: 1px solid black; border-bottom: 1px solid black; height: 10px;"> </td></tr> </table>						
		<table border="0" style="width: 100%;"> <tr><td style="border-top: 1px solid black; border-bottom: 1px solid black; height: 10px;"> </td><td style="border-top: 1px solid black; border-bottom: 1px solid black; height: 10px;"> </td></tr> <tr><td style="border-top: 1px dashed black; border-bottom: 1px dashed black; height: 10px;"> </td><td style="border-top: 1px dashed black; border-bottom: 1px dashed black; height: 10px;"> </td></tr> <tr><td style="border-top: 1px solid black; border-bottom: 1px solid black; height: 10px;"> </td><td style="border-top: 1px solid black; border-bottom: 1px solid black; height: 10px;"> </td></tr> </table>							.	<table border="0" style="width: 100%;"> <tr><td style="border-top: 1px solid black; border-bottom: 1px solid black; height: 10px;"> </td><td style="border-top: 1px solid black; border-bottom: 1px solid black; height: 10px;"> </td></tr> <tr><td style="border-top: 1px dashed black; border-bottom: 1px dashed black; height: 10px;"> </td><td style="border-top: 1px dashed black; border-bottom: 1px dashed black; height: 10px;"> </td></tr> <tr><td style="border-top: 1px solid black; border-bottom: 1px solid black; height: 10px;"> </td><td style="border-top: 1px solid black; border-bottom: 1px solid black; height: 10px;"> </td></tr> </table>						


Autoévaluation : 



 Avec aide  avec outil

Date : / / 20.....
Avis de l'enseignant(e) :

Entoure le nombre demandé.

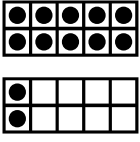



















		2	
	 	6	
		1	
	 	7	
		5	
	 	10	
		9	
		3	
	 	8	
		4	

Autoévaluation : 

 Avec aide  avec outil

Date : / / 20.....
Avis de l'enseignant(e) :

Entoure le nombre demandé.





















	12	
	16	
	11	
	17	
	15	
	20	
	19	
	13	
	18	
	14	

Autoévaluation :   

 Avec aide   avec outil

Date : / / 20.....
Avis de l'enseignant(e) :

Complète avec le nombre correspondant.





















				
				
				
				

Autoévaluation :   

 Avec aide  avec outil

Date : / / 20.....
Avis de l'enseignant(e) :

Complète les cartes à points par le nombre indiqué.






























				
				
				
				

Autoévaluation :   

 Avec aide  avec outil

Date : / / 20.....
Avis de l'enseignant(e) :

Complète avec le nombre correspondant.

Autoévaluation : 

 Avec aide  avec outil

Date : / / 20.....
Avis de l'enseignant(e) :

Complète les cartes à points par le nombre indiqué.

