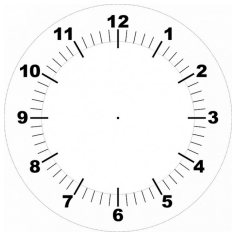
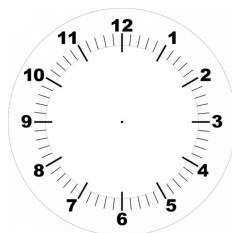


Grandeurs et mesures

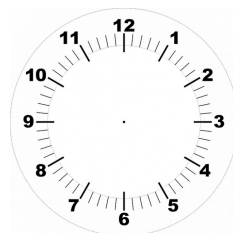
Trace les aiguilles des horloges.



04 : 25



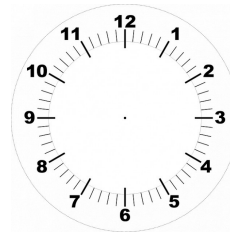
8 : 10



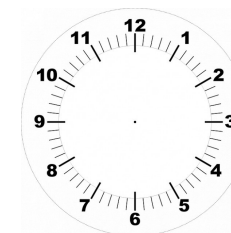
11 : 55

Grandeurs et mesures

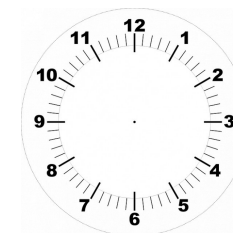
Trace les aiguilles des horloges.



09 : 05



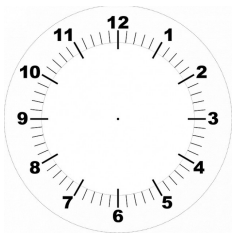
01 : 35



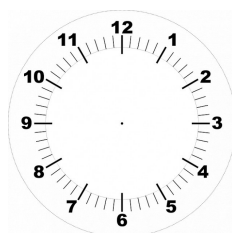
03 : 50

Grandeurs et mesures

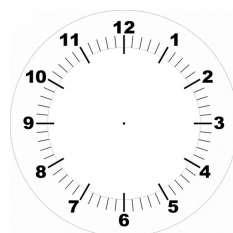
Trace les aiguilles des horloges.



02 : 40



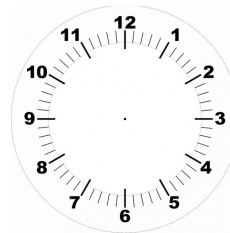
06 : 15



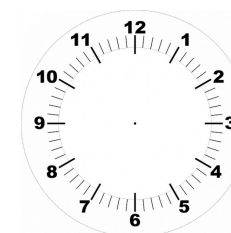
10 : 05

Grandeurs et mesures

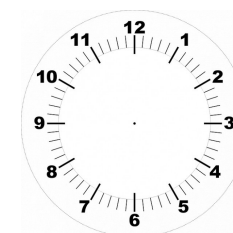
Trace les aiguilles des horloges.



05 : 45



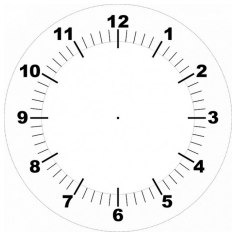
07 : 20



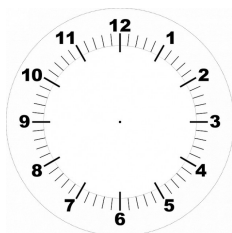
12 : 30

Grandeurs et mesures


Trace les aiguilles des horloges.



18:35



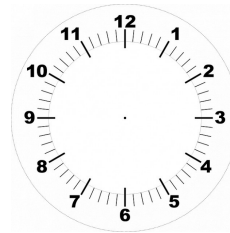
05:50



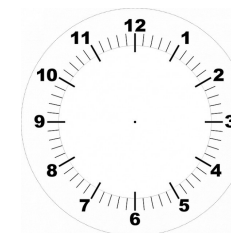
21:55

Grandeurs et mesures

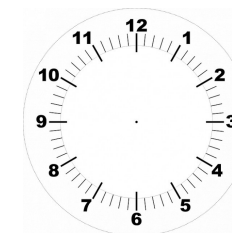
Trace les aiguilles des horloges.



11:30



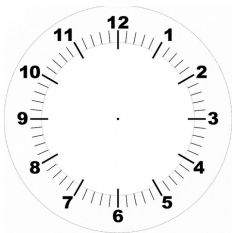
00:55




14:45

Grandeurs et mesures

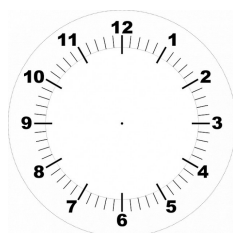
Trace les aiguilles des horloges.



18:20



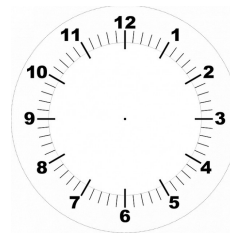
16:10



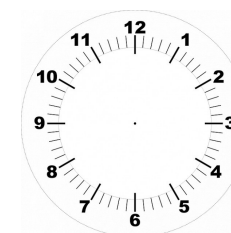
09:05

Grandeurs et mesures

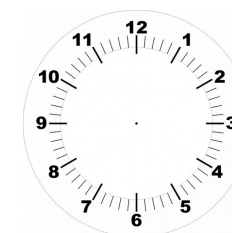
Trace les aiguilles des horloges.



08:25



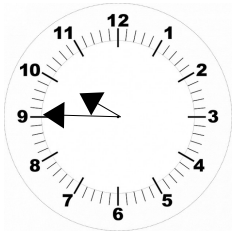
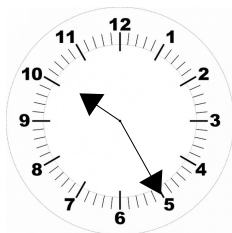
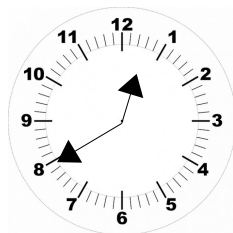
10:15



19:30

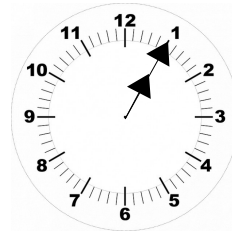
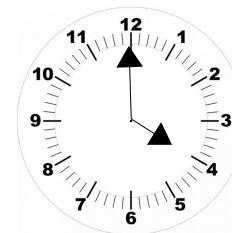
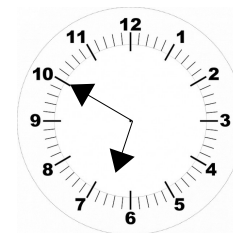
Grandeurs et mesures

Écris l'heure indiquée par les aiguilles (matin et après-midi).

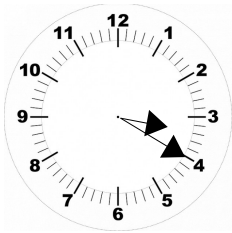
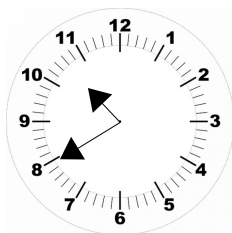
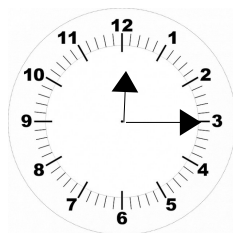
Grandeurs et mesures

Écris l'heure indiquée par les aiguilles (matin et après-midi).

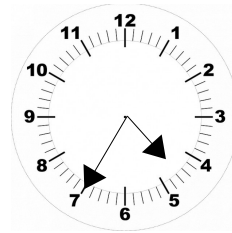
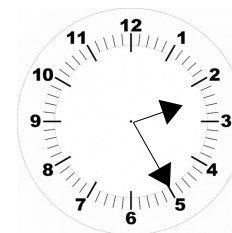
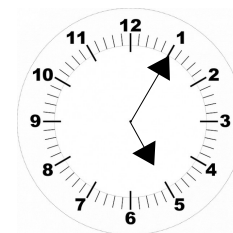
Grandeurs et mesures

Écris l'heure indiquée par les aiguilles (matin et après-midi).

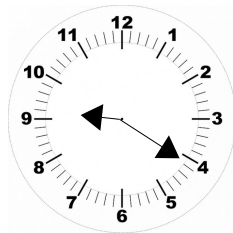
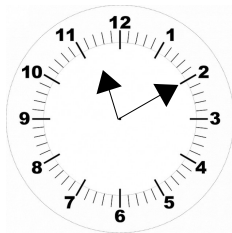
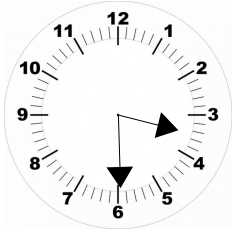
Grandeurs et mesures

Écris l'heure indiquée par les aiguilles (matin et après-midi).

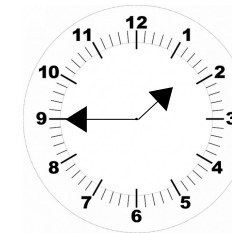
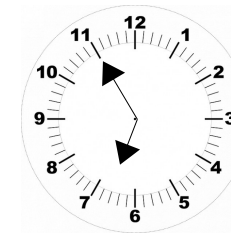
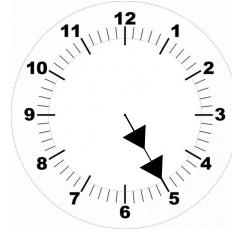
Grandeurs et mesures

Indique l'heure (après-midi).



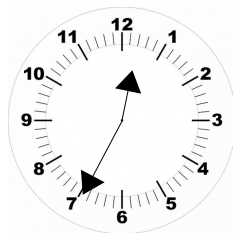
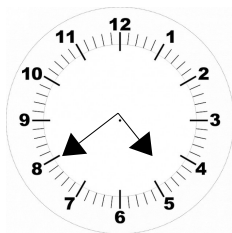
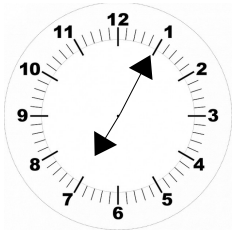
Grandeurs et mesures

Indique l'heure (matin).



Grandeurs et mesures

Indique l'heure (matin).



Grandeurs et mesures

Indique l'heure (après-midi).

