

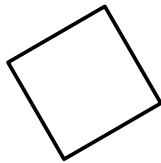
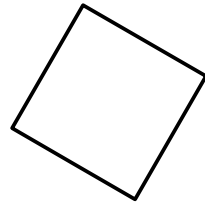


# LES FIGURES GÉOMÉTRIQUES

## 1 Les carrés




côté


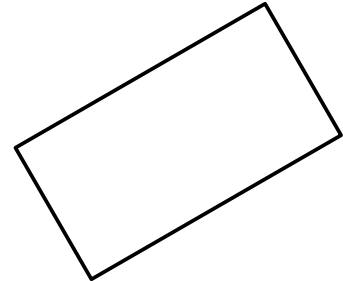


sommet

## 2 Les rectangles



largeur



longueur

## 3 Les triangles

