





Prénom :

Date :




Lire l'heure CP

1 Colorie l'horloge qui indique la bonne heure.





10 heures



3 heures



7 heures







Prénom :

Date :





Lire l'heure CP

1 Colorie l'horloge qui indique la bonne heure.




2 heures et demie



5 heures



10 heures 30




Prénom :

Date :

Lire l'heure CP

1 Colorie la bonne heure.



1 heure

12 heures

7 heures et demie

4 heures et demie




5 heures et demie

11 heures

8 heures

6 heures et demie




11 heures et demie

8 heures et demie

5 heures

12 heures



9 heures et demie

3 heures

2 heures et demie

10 heures et demie

Prénom :

Date :

Lire l'heure CP

1 Relie.

11:00



7 heures

06:30



2 heures et demie

10:30



10 heures et demie

11:00



6 heures et demie

17:00



11 heures et demie

2 Colorie de la même couleur les cases qui représentent la même heure.

17:00



17:00

11 heures et demie



11 heures et demie



17:00

11 heures et demie

17:00

11 heures et demie




Prénom :

Date :

Lire l'heure CP

1 Colorie la bonne heure.



1 heure

12 heures

7 heures et demie

4 heures et demie




5 heures et demie

11 heures

8 heures

6 heures et demie




11 heures et demie

8 heures et demie

5 heures

12 heures



9 heures et demie

3 heures

2 heures et demie

10 heures et demie

Prénom :

Date :

Lire l'heure CP

1 Relie.

11:00



7 heures

06:30



2 heures et demie

10:30



10 heures et demie

02:30



6 heures et demie

17:00



11 heures

<http://fee-des-ecoles.fr>

2 Colorie de la même couleur les cases qui représentent la même heure.

09:30



01:00

11 heures et demie



1 heure



7:00

7 heures

04:30

9 heures et demie



Prénom :

Date :

Lire l'heure CP

1 Relie.

12:30



20:00



19:30



14:30



17:00



2 Colorie de la même couleur les cases qui représentent la même heure.

13:30



17:00



22:30





21:00

Prénom :

Date :





Lire l'heure CP

1 C'est le matin. Écris l'heure indiquée par l'horloge.



2 Dessine les aiguilles des horloges :

- ◆ En rouge, la petite aiguille
- ◆ En bleu, la grande aiguille







01:30

07:00

04:30

11:00



03:30


10:30

9:00

02:30





Lire l'heure CP

1 C'est l'après-midi. Écris l'heure indiquée par l'horloge.



2 Dessine les aiguilles des horloges :

- ◆ En rouge, la petite aiguille
- ◆ En bleu, la grande aiguille







23:00

15:30

19:30

14:00



16:00

21:30

13:30

20:00